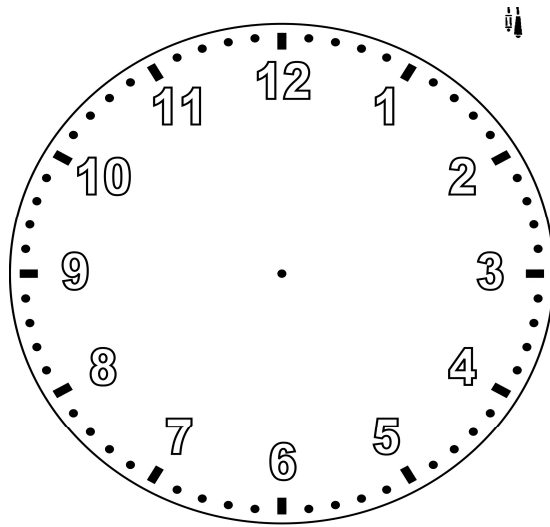


LUNEDI' 30 MARZO

LE ORE ANTIMERIDIANE E POMERIDIANE



Indica sull'orologio l'orario in cui verra' festeggiato il "Non compleanno"

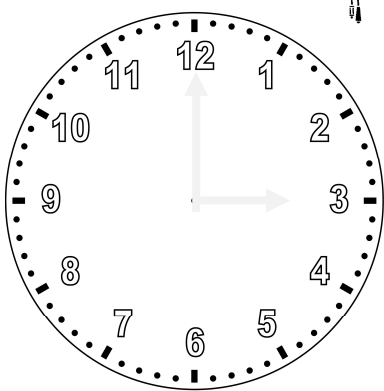


Ore _____

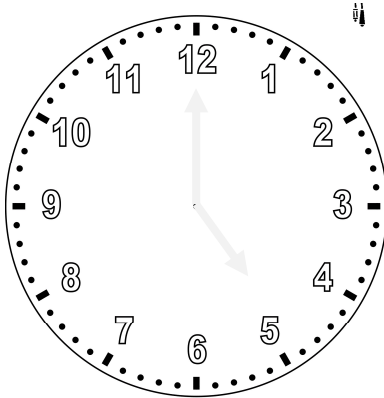
BUON "NON COMPLEANNO A ME"



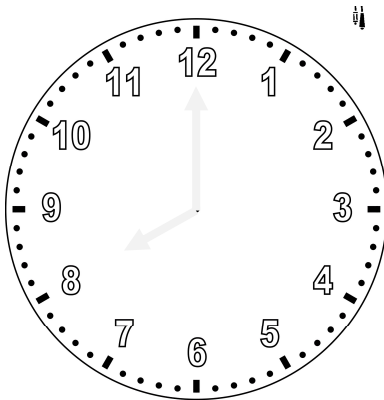
Le 12 ore antimeridiane (dalla mezzanotte a mezzogiorno), sono quelle riportate sul quadrante.



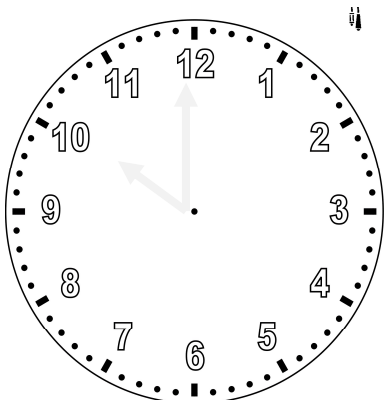
Sono le _____



Sono le _____

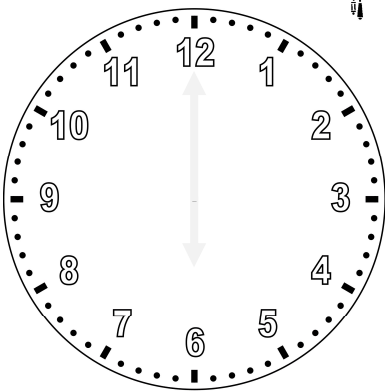


Sono le _____

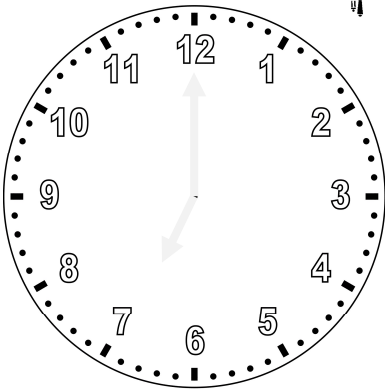


Sono le _____

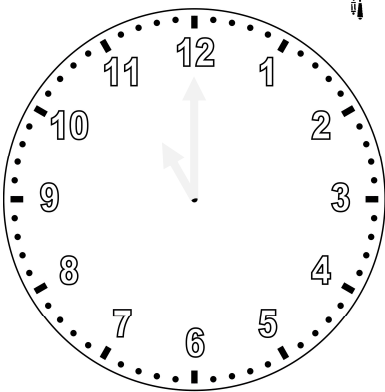
Le 12 ore pomeridiane (dal mezzogiorno alla mezzanotte) le devi calcolare tu.



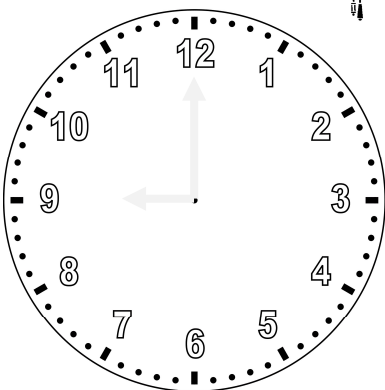
Sono le _____



Sono le _____



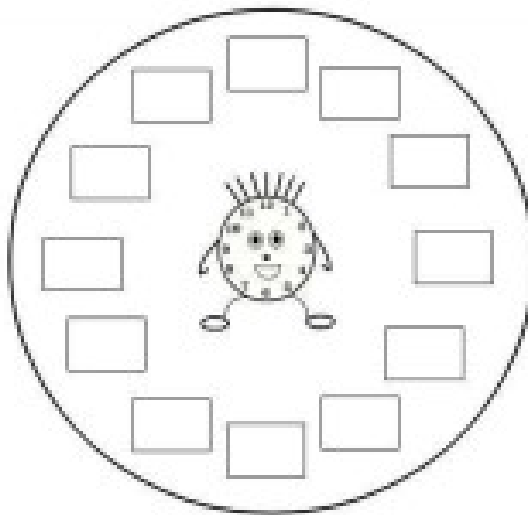
Sono le _____



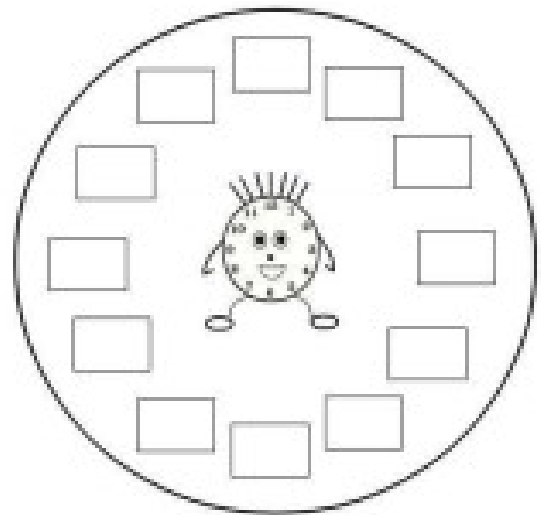
Sono le _____

Ci esercitiamo

Completa i quadranti degli orologi



Ore antimeridiane (mattino)



Ore pomeridiane (pomeriggio)

Completa

2.00 pomeridiane =

3.00 pomeridiane =

4.00 pomeridiane =

5.00 pomeridiane =

6.00 pomeridiane =

7.00 pomeridiane =

8.00 pomeridiane =

9.00 pomeridiane =

10.00 pomeridiane =

11.00 pomeridiane =

12.00 pomeridiane =